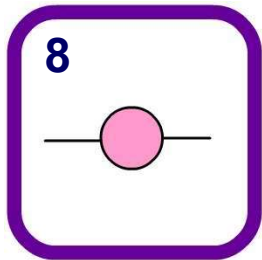
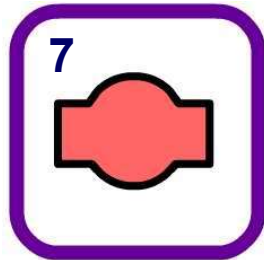
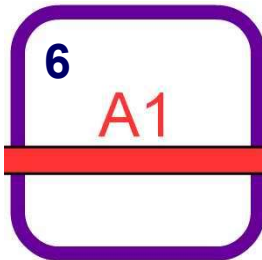
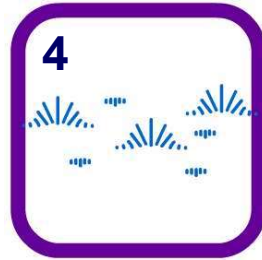
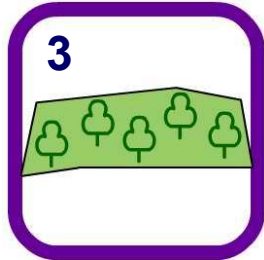
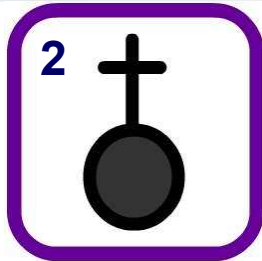


Match the O.S. symbol to the correct description



coniferous forest

bus station

camp site

deciduous forest

picnic site

view point

church with a tower

marsh

secondary road

train station

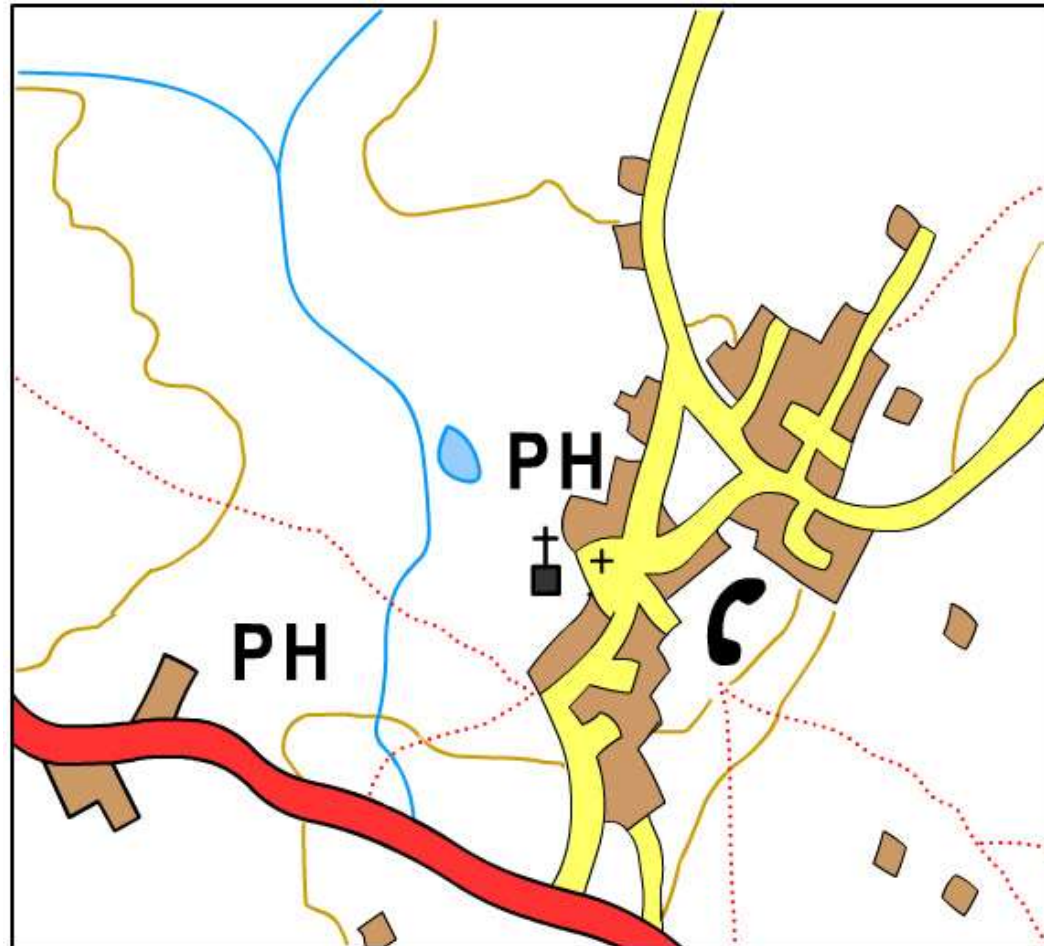
main road

church with a spire



O.S. map symbols

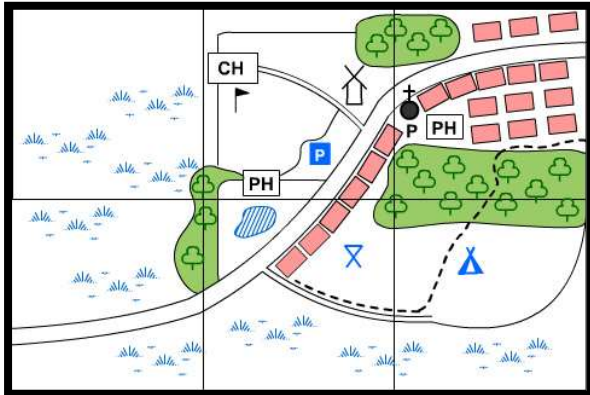
Identify all the symbols you can spot on this Ordnance Survey map.



Hint - There are 11 different symbols to identify!



O.S. map symbols



The village of Cheesenhams has an area of _____ km². It has a Post Office, which is next to the _____. There are _____ pubs and _____ areas of woodland. Cheesenhams Golf Club is west of the _____, which is north-east of the _____. Marshland lies to the _____ and east of the village. A _____ leads from the main road, past a picnic spot and _____ and finishes at the New Estate, which lies at the _____ end of the village.

car park	two	footpath	camp site	windmill
north-east	one	three	church	south

?
hide words
solve
↺

